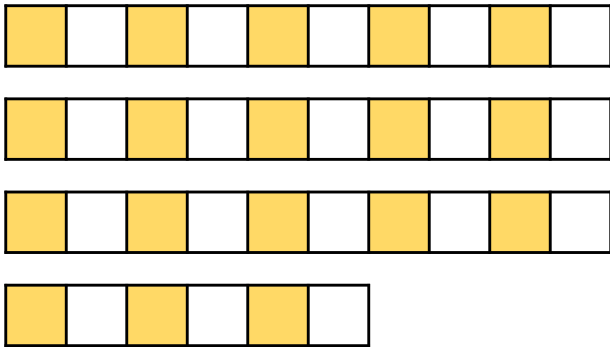


## Numbers to 50

4a. Sam has made the number 37.



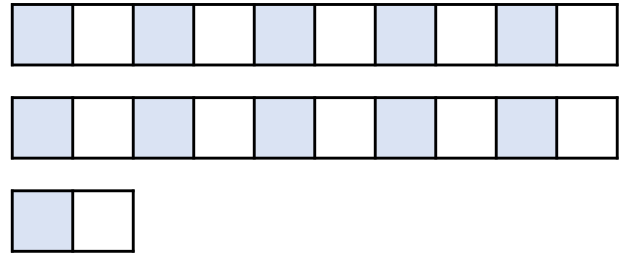
Do you agree? Explain your answer.



R

## Numbers to 50

4b. Milly has made the number 22.




Do you agree? Explain your answer.



R

5a. Fozia is counting backwards.



She says,



If I count backwards from 48 to 39, I will say 43.

Is Fozia correct? Prove it.



R

5b. Alfie is counting forwards.



He says,



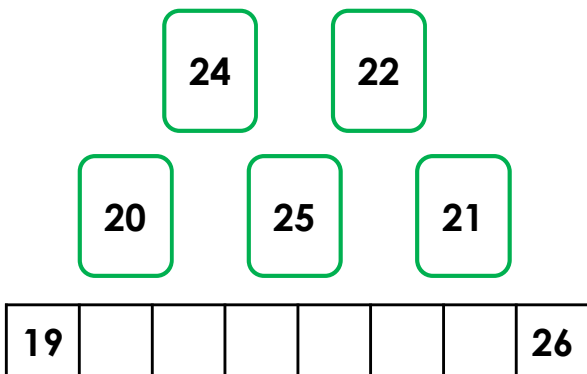
If I count forwards from 28 to 37, I will say 38.

Is Alfie correct? Prove it.



R

6a. Rory is counting forwards from 19 to 27 using the digit cards below.

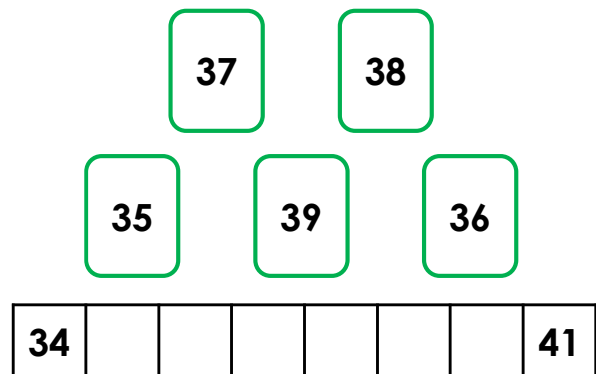


Which digit card is missing?



PS

6b. Jemma is counting backwards from 42 to 34 using the digit cards below.



Which digit card is missing?



PS