


## Numbers to 50

## Numbers to 50

9a. Each jar holds 10 cookies.



How many cookies are there altogether?



VF

9b. Each pencil case holds 10 pencils.




How many pencils are there altogether?



VF

10a. Circle the number shown below.




29

41

37

VF

10b. Circle the number shown below.



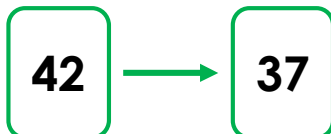
28

34

43

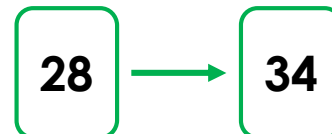
VF

11a. Count backwards from 42 to 37. What number will you say after 40?



VF

11b. Count forwards from 28 to 34. What number will you say after 29?



VF

12a. Lucas is counting forwards from 46.

He says,



46, 47, 48, 49...

What number will he say next?



VF

12b. Ella is counting backwards from 22.

She says,



22, 21, 20, 19...

What number will she say next?



VF