


Tens and Ones

4a. Circle the numbers that can be represented using the equipment below.

19	40	42	36	27
----	----	----	----	----




PS

Tens and Ones


4b. Circle the numbers that can be represented using the equipment below.

16	22	35	48	50
----	----	----	----	----



PS

5a. Karl has made the number below.




Explain his mistake.



R

5b. Evie has made the number below.

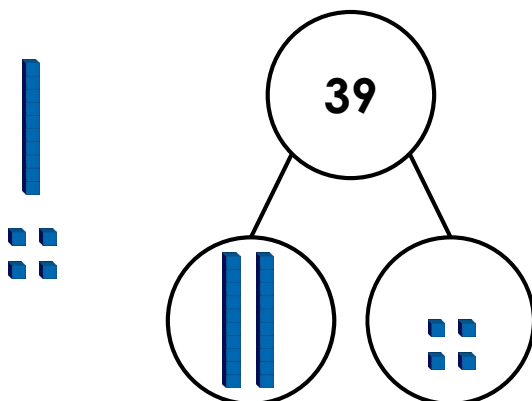


Explain her mistake.



R

6a. Ed is making a part-whole model.

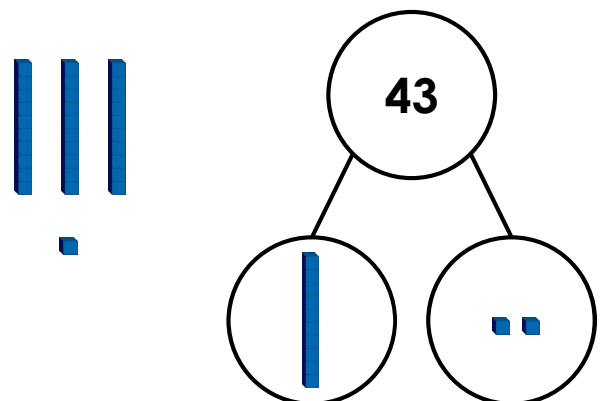


Does he have enough tens and ones to complete it? Prove it.



R

6b. Dani is making a part-whole model.



Does she have enough tens and ones to complete it? Prove it.



R