


Tens and Ones

9a. Complete the sentence below.



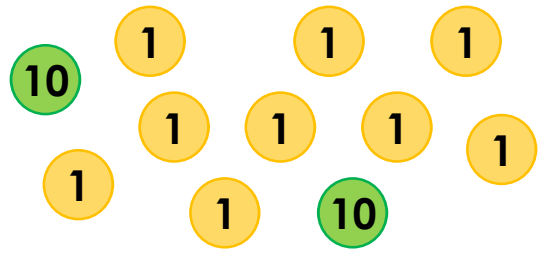
There are tens and ones.



VF

Tens and Ones

9b. Complete the sentence below.

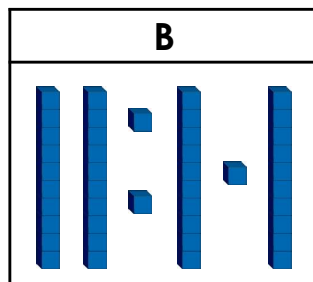
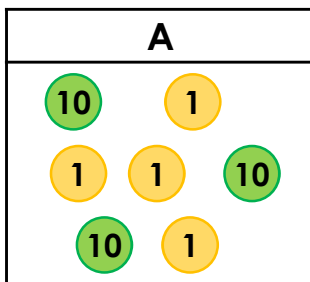


There are tens and ones.



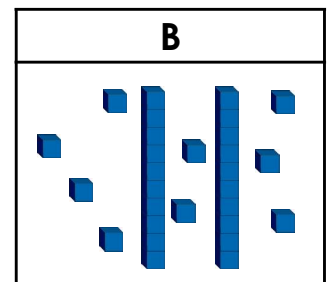
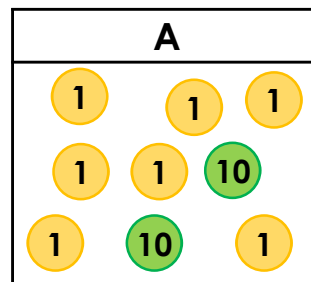
VF

10a. Which representation below shows the number forty-three?



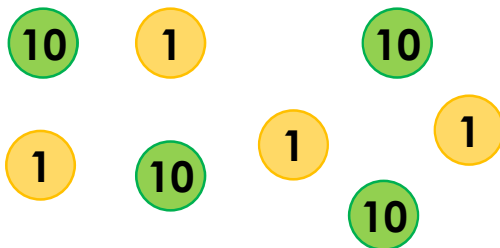
VF

10b. Which representation below shows the number twenty-seven?




VF

11a. What number is shown below?



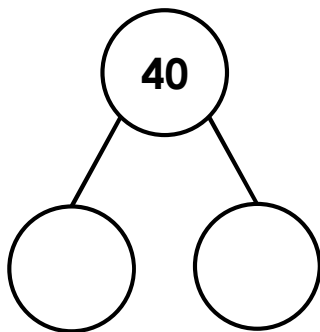
VF

11b. What number is shown below?



VF

12a. Complete the part-whole model and finish the sentence.

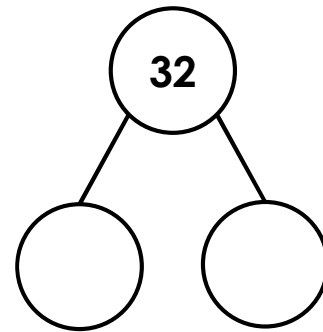


= tens + ones



VF

12b. Complete the part-whole model and finish the sentence.



= tens + ones



VF