

Related Facts

9a. Tick the calculation that is not a related fact.

- A. $14 + 3 = 17$ ☐
- B. $3 + 14 = 17$ ☐
- C. $18 - 4 = 14$ ☐
- D. $17 - 14 = 3$ ☐



VF

Related Facts

9b. Tick the calculation that is not a related fact.

- A. $7 + 5 = 12$ ☐
- B. $5 + 7 = 12$ ☐
- C. $12 - 5 = 7$ ☐
- D. $12 - 3 = 9$ ☐



VF

10a. Use the digit cards to complete two related facts.

+ =
 - =



VF


10b. Use the digit cards to complete two related facts.

+ =
 - =



VF

11a. Complete two calculations to match the bar model.




+ =
 - =



VF

11b. Complete two calculations to match the bar model.

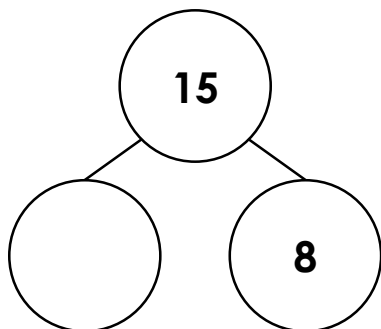


+ =
 - =



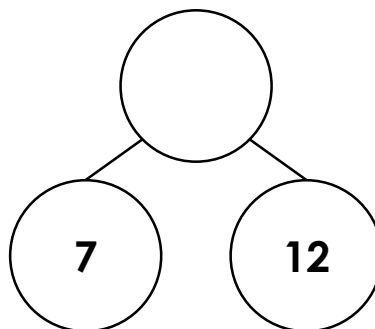
VF

12a. Complete the part-whole model and write four calculations to match.



VF

12b. Complete the part-whole model and write four calculations to match.



VF