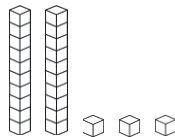
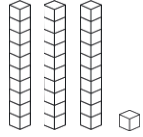
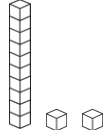
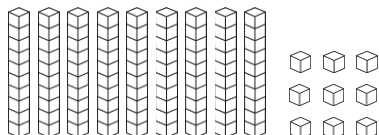


## Reading and Writing Numbers to 50

Can you fill out any missing boxes for each of the numbers below? The first one has been done for you to show you what to do.

Numerals	Number in Words	Tens	Ones	Illustration
23	twenty-three	2	3	
16	sixteen			
38				
	forty-six	4	6	
		3	1	
44				
	twenty-two			
				
		0	7	

### Challenge

Numerals	Number in Words	Tens	Ones	Illustration
				

## Reading and Writing Numbers to 50 - Answers

Can you fill out any missing boxes for each of the numbers below? The first one has been done for you to show you what to do.

Numerals	Number in Words	Tens	Ones	Illustration
23	twenty-three	2	3	
16	sixteen	1	6	
38	thirty-eight	3	8	
46	forty-six	4	6	
31	thirty-one	3	1	
44	fourty-four	4	4	
22	twenty-two	2	2	
12	twelve	1	2	
7	seven	0	7	

## Challenge

Numerals	Number in Words	Tens	Ones	Illustration
99	ninety-nine	9	9	